



ARMY PUBLIC SCHOOL DAMANA

SESSION (2023-24)

HOLIDAYS' HOMEWORK -CLASS V

Dear Children,

- You Matter us most and we All Miss You!!!!.
- Stay Safe
- Be Kind to your Family
- Get Creative

Instructions for kids:

- Do your homework neatly and on your own.
- Learn and Revise all the work done in the class.
- Make your own time table for summer vacations and get it laminated.
- Before going to bed at night, Plan your tasks for the next day and pen down them in small diary. You can write at least 2-3 lines that what did you do the whole day and what you will do the next day.
- Prepare a folder, decorate it and bring your all holidays activities in it.


SUBJECT-ENGLISH

A. Choose the best suitable answer :

1. "This luggage belongs to Mr. and Mrs. Man, its _____."".

- a) their
- b) they
- c) them

Synonyms



Across

- [4] Another word for fast
- [7] Another word for mad
- [9] Another word for scared
- [11] Another word for bad
- [12] Another word for cold
- [13] Another word for loud

Down

- [1] Another word for hot
- [2] Another word for good
- [3] Another word for small
- [5] Another word for happy
- [6] Another word for old
- [8] Another word for sad
- [10] Another word for slow

SUBJECT:HINDI

निर्देश: 1. वर्तनी की शुद्धता व लिखावट का ध्यान रखें।

2. ग्रीष्मावकाश एक अलग फ़ाइल में रखें ।

1. कक्षा में पढ़ाए गए पाठों का पुनः दोहरान कर सुलेख लिखने का प्रयास करें। (सुलेख 10 पृष्ठ लिखें।)

2. किसी भी एक महान व्यक्ति के जीवन संघर्ष के विषय में लिखिए। (जैसे-ए पी जे अब्दुल कलाम)

3. पर्यावरण संरक्षण (पेड़ ,जल आदि) व सामाजिक एकता संबंधित दो –दो नारे लिखें ।

4. Art integrated (कला एकीकृत) –परियोजना कार्य (प्रोजेक्ट वर्क)

भारत के राज्यों जम्मू व कश्मीर और गुजरात के खानपान व नृत्यों की जानकारी एकत्रित करें , उनके

चित्र चिपकाएँ (कोलॉज बनाएँ)और उनके बारे में लिखें। (scrap book में)

5.अति अनिवार्य : पी ए-1 परीक्षा के पाठ्यक्रम की पुनरावृत्ति कीजिए।

SUBJECT : MATHS

Practice Questions

Q1. Assertion:- The value of $CM-CD+CVII$ is 607.

Reason:- Symbol C can be added to every Roman symbol, but it can be subtracted from D and M only.

A) Both Assertion and Reason are correct and Reason is the correct explanation for Assertion

B) Both Assertion and Reason are correct but Reason is not the correct explanation for Assertion

C) Assertion is correct but Reason is incorrect

D) Assertion is incorrect but Reason is correct

Q2. Assertion :- $946898 + (800362 + 826346) = (800362 + 826346) + 946898$ both are equal.

Reason :- The sum of three or more numbers does not change even when their grouping is changed. This is called associative property.

- A) Both Assertion and Reason are correct and Reason is the correct explanation for Assertion
- B) Both Assertion and Reason are correct but Reason is not the correct explanation for Assertion
- C) Assertion is correct but Reason is incorrect
- D) Assertion is incorrect but Reason is correct

Q3. Assertion: A number 2746 rounded off to three significant figures is 2750, while the number 2743 would be 2740

Reason: In rounding off the uncertain digits, the preceding digit is raised by 1 if the insignificant digit to be


dropped is more than 5 and is left unchanged if the latter is less than 5. A. if both assertion and reason are true reason is the correct explanation of assertion. B. If both assertion and reason are true but reason is not the correct

explanation for assertion.

- C. If assertion is true but reason is false.
- D. IF both assertion and reason are false.

Extra questions (Based on Logical thinking)

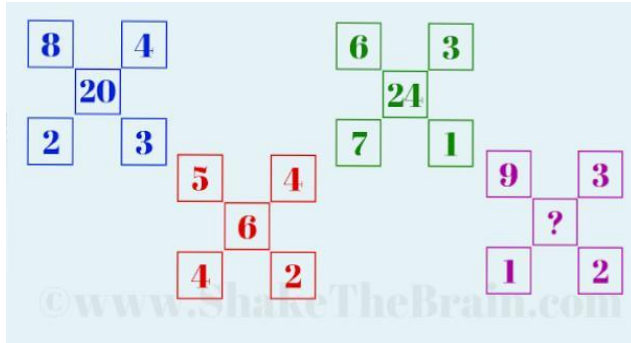
Q1. Solve the following puzzle



IF
 $3*1=342$
 $4*2=862$
 $5*1=564$
 $3*2=651$
THEN
 $2*4=?$

Share if you could find it :)

Q2. Can you find the missing number?



Q3. Read the following statements carefully and answer the question. 1. Tom, Nick, and Harry are intelligent.

2. Tom, Brown, and Jack are hard working.

3. Brown, Harry and Jack are honest.

4. Tom, Nick and Jack are ambitious.

Which of the following person is neither hard working not ambitious? (a) Tom (b) Nick (c) Harry (d) Jack

Art Integration (with Gujarat)

Q1. Write Gujarati counting 1 – 20 along with spellings and learn how to pronounce the numbers.

Q2. Find the famous mathematician of Gujarat , paste their pictures and write about their innovations and

great work.

Model

Make a table wheel on Roman Numerals.

SUBJECT:EVs

I. Paste the Picture of your favourite outdoor game and collect the following information about

it: 

- i. Number of players required.
- ii. Equipments required.
- iii. Find out if it is a national sport of any country.
- iv. Cups/Trophy related to that particular field.
- v. Awards related to that game.



II. RESEARCH WORK:

➤ Create a scrape folder(as shown in picture) of your research on topic- -How colour influence



our taste ?

✓ Including following points –

- i) Introduction to your topic.
- ii) Describe background.
- iii) Material required
- iv) Hypothesis
- v) Conclusion.

III. VALUES WITH SCIENCE



➤ Make a model of digestive system or excretory system using clay ,thread, stones,waste paper or any other waste materialavailable to you.

Some ideas are given below.



Or

What are joints? Draw the flow chart of different joints.Paste the pictures of different asanas and mention the kind of joint involve in each asana?

➤ Art Integrated Project Work: Collect photographs of 10 great musicians of Gujarat and Jammu , with a write-up on their introduction, and all types of musical instruments they play. Paste their photographs with their musical instruments . (To be pasted in the scrap-book).

SUBJECT :ART

Make two Lippan Art(traditional art of Gujrat)

Important Instructions

Size- page of coloured Scrape book

You can use rope, any hard thread or mould-it clay instead of Lippan art clay. You need mirrors of different shape and size. Use Fevicol instead of any Glue. OR

Make one Jharokha (traditional art of Gujrat)

You can make this Jharokha with waste box or cardboard, mirrors, any shiny material, fevicol, 3D outliner, mould-it clay, acrylic colours etc.

You can take help from your parents, You tube and Google or you can call your Art teacher Preetika Sharma.

SUBJECT : COMPUTER

(An integration with Gujarat State)

Q1. Take a printout of 3 slides in Powerpoint or any other Software .

- a) First Slide should contain the images and description of folk dances of Gujarat
- b) Second slide must contain the images of hydroelectric power dam built on Gujarat rivers.
- c) Put the images of top 5 tourist places in Gujarat

Use proper animation , design for making the slide attractive.